

KINDERGARTEN

Holiday homework for winter vacation

(2015-2016)



Winter is the time for comfort, warmth and happiness with our loved ones. We do not remember holidays, we remember moments. So in these holidays lets create some beautiful moments with kids with the help of some fun activities. Prepare the below mentioned art and craft work according to the section of your ward:-

Pre –Primary

Dove- Make a scenery on any “Season” using best out of waste.
-Prepare a model of “Animal Kingdom”.

Swan-Make any figure or object with “Solid Shapes”.
-Prepare a working model of “Wall clock”.

Sparrow- Make a “Hut” using Ice cream Sticks.
-Prepare a model on any one “Mode of Transport

Parrot- Make an “Engine/ Train” using tin cans.
-Prepare a model on any “Source of Water”.

Note:-

☑ Chandelier making is compulsory for all the sections.

☑ Revise syllabus from Oct-Dec.

☑ Kindly submit the holiday homework by Monday, 18th January, 2016 positively.

As the holiday season approaches, may your home be filled with lots of love, laughter and togetherness.

Wishing you and your family a very happy and prosperous new year!!

डी. ए.वी पब्लिक स्कूल
सेक्टर-6 द्वारका

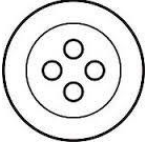
रेफ़रन्स न.

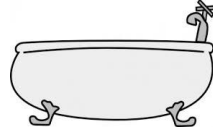
दिनांक

नाम

कक्षा.....

चित्र देख कर अक्षर लिखो










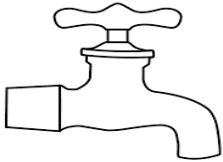
रिक्त स्थान भरो



मग



ट



ल



बत

लय वाले शब्द

महल - _____

चमक- _____

नरम - _____

सड़क - _____

डी. ए.वी पब्लिक स्कूल

सेक्टर-6 द्वारका

रेफरन्स न.

दिनांक

नाम

कक्षा.....

शब्द लिखो

दो वर्ण

तीन वर्ण

चार वर्ण

| | | |
|-------|-------|-------|
| _____ | _____ | _____ |
| _____ | _____ | _____ |
| _____ | _____ | _____ |
| _____ | _____ | _____ |

DAV Public School

Sector VI, Dwarka, New Delhi

Ref.no. _____

Date _____

Subject- English

Name _____

Class- Pre Primary _____

Write the correct vowel in the given box to make a word.



| | | |
|---|--|---|
| r | | m |
|---|--|---|



| | | |
|---|--|---|
| h | | n |
|---|--|---|



| | | |
|---|--|---|
| g | | m |
|---|--|---|



| | | |
|---|--|---|
| k | | t |
|---|--|---|

a e i o u

DAV Public School

Sector VI, Dwarka, New Delhi

Ref.no. _____


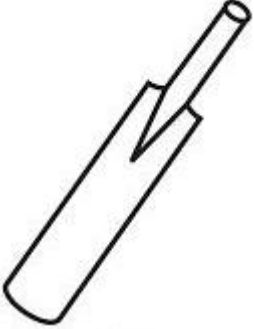


Date _____

Subject- English

Name _____

Class- Pre Primary _____

Look at the picture & make a word from the given letters.

| | | | | | | | | | |
|---|---|---|---|---|---|---|---|--|--|
|  | <table border="1"><tbody><tr><td>c</td><td>-</td><td>a</td><td>m</td></tr><tr><td>x</td><td>i</td><td>t</td></tr></tbody></table> | c | - | a | m | x | i | t | <p>_____</p> <p>_____</p> <p>cat</p> <p>_____</p> |
| c | - | a | m | | | | | | |
| x | i | t | | | | | | | |
|  | <table border="1"><tbody><tr><td>b</td><td>a</td><td>k</td></tr><tr><td>j</td><td>o</td><td>t</td></tr></tbody></table> | b | a | k | j | o | t | <p>_____</p> <p>_____</p> <p>_____</p> | |
| b | a | k | | | | | | | |
| j | o | t | | | | | | | |
|  | <table border="1"><tbody><tr><td>c</td><td>i</td><td>m</td></tr><tr><td>j</td><td>a</td><td>t</td></tr></tbody></table> | c | i | m | j | a | t | <p>_____</p> <p>_____</p> <p>_____</p> | |
| c | i | m | | | | | | | |
| j | a | t | | | | | | | |
|  | <table border="1"><tbody><tr><td>f</td><td>e</td><td>n</td></tr><tr><td>t</td><td>a</td><td>p</td></tr></tbody></table> | f | e | n | t | a | p | <p>_____</p> <p>_____</p> <p>_____</p> | |
| f | e | n | | | | | | | |
| t | a | p | | | | | | | |

DAV Public School

Sector VI, Dwarka, New Delhi

Ref.no. _____

Date _____

Worksheet Subject- EVS




Name _____

Class- Pre Primary _____


1. Draw the tools of each helper in the space provided?



2. Match the animals with their homes?



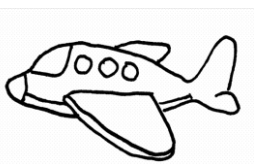
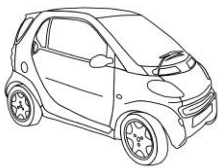

3. Label the different parts of a plant?



4. Draw a circle on living things and cross the non living things?



5. See the below pictures and write W for water transport, L for land transport and A for air transport?



DAV Public School

Sector VI, Dwarka, New Delhi

Ref.no. _____

Date _____

Worksheet Subject- Maths

Name _____

Class- Pre Primary _____

Q1. Fill the missing numbers.

a. 59 _____ 62 _____

b. 88, 89 _____ 93

Q2. What comes

Before

After

Between

_____ 74

46 _____

39 _____ 41

_____ 30

51 _____

79 _____ 81

Q3. Solve.

$$\begin{array}{r} 13 \\ + 5 \\ \hline \end{array}$$

$$\begin{array}{r} 16 \\ - 8 \\ \hline \end{array}$$

$$\begin{array}{r} 11 \\ + 7 \\ \hline \end{array}$$

$$\begin{array}{r} 14 \\ - 4 \\ \hline \end{array}$$

$$\begin{array}{r} 17 \\ - 0 \\ \hline \end{array}$$

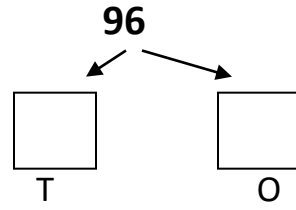
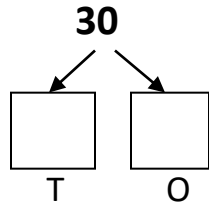
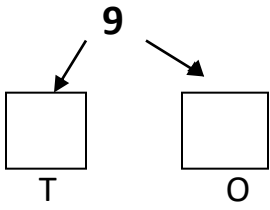
Q4. Mental Maths

a. $10 - 5 =$ _____

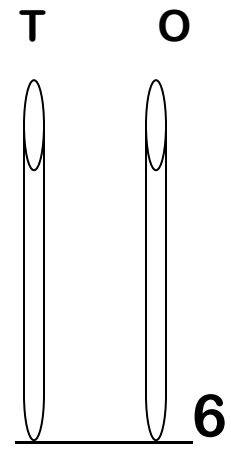
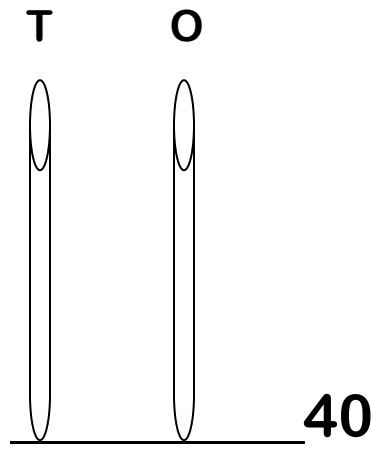
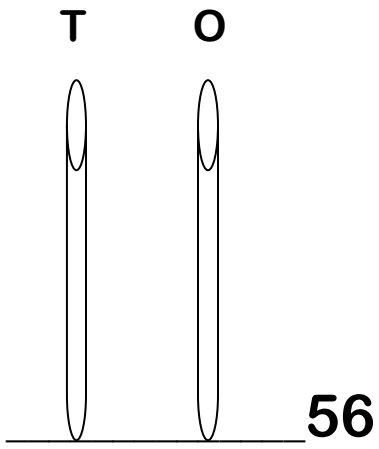
b. $12 - 6 =$ _____

c. $13 + 4 =$ _____

Q5. Concept of tens and ones.



Q6. Draw the beads on abacus.



Q7. Draw two objects of each

a. Light weight

b. Heavy weight

Join the dots from 1 to 50 in sequence and complete the picture.
Now color it.

